


Fireworks

Emma had some fireworks.
Some made 3 stars.
Some made 4 stars.




Altogether Emma's fireworks made 19 stars.
How many of them made 3 stars?
Find two different answers.

What if Emma's fireworks made 25 stars?
Find two different answers.



At the toy shop

The toy shop stocks tricycles and go-carts.
The tricycles have 3 wheels.
The go-carts have 5 wheels.




Suna counted the wheels.
He counted 37 altogether.

How many tricycles are there?
How many go-carts?

Find two ways to do it.

Fireworks

Emma had some fireworks.
Some made 3 stars.
Some made 4 stars.




Altogether Emma's fireworks made 19 stars.
How many of them made 3 stars?
Find two different answers.

What if Emma's fireworks made 25 stars?
Find two different answers.



At the toy shop

The toy shop stocks tricycles and go-carts.
The tricycles have 3 wheels.
The go-carts have 5 wheels.



Suna counted the wheels.
He counted 37 altogether.

How many tricycles are there?
How many go-carts?

Find two ways to do it.